

Addition and Subtraction to 20

Summer Mosaic

Solve the calculations to reveal the hidden picture. Each answer has a special colour.

yellow = 0-8

pink = 9-15

brown = 16-20





						$17 - 1$	
			$19 - 4$	$9 + 6$		$17 + 2$	
		$10 - 1$	$6 + 5$	$19 - 10$	$12 + 2$	$18 - 2$	
	$15 - 4$	$12 + 3$	$18 - 9$	$11 + 2$	$17 - 2$	$5 + 8$	
	$20 - 20$	$5 + 2$	$17 - 9$	$2 + 6$	$2 - 1$	$2 + 2$	
	$9 - 1$	$8 + 0$	$10 - 2$	$1 + 6$	$18 - 10$	$4 + 3$	
		$14 - 7$	$6 - 3$	$3 + 2$	$5 + 2$		
			$7 - 4$	$20 - 12$			
			$5 + 1$	$2 + 6$			

Challenge: You have 5 ice creams. You eat 2. How many do you have left?
Write this problem as a calculation.

2D Shape Hunt

Count and colour the 2D shapes hidden in this summer scene.



Count in 2s starting from 2 and colour the right numbers.

2	4	5	7
9	6	8	11
13	15	10	17
19	14	12	11
9	16	17	19
15	18	20	11

Count in 10s starting from 10 and colour the right numbers.

10	20	12	13
14	30	15	16

50	40	17	18
60	19	100	12
70	80	90	13

Count in 5s starting from 5 and colour the right numbers.

4	5	6	8
12	10	14	16
18	15	20	25
52	28	32	30
34	36	40	35
53	50	45	54

Summer

There are 8 differences in the pictures below, can you find them all?

